





# Math Activities

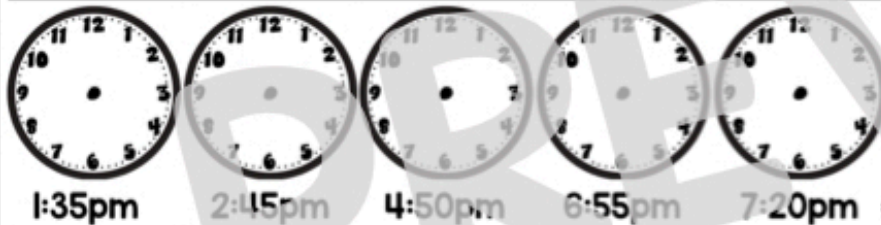
## FAMILY SCHEDULE DRAW & MATCH

Karar's family likes to be on time. Help him make a schedule of his family's different activities by drawing the hands on each clock to match the time below it. Next, cut & paste the family activity that most likely goes with each time.

Name: \_\_\_\_\_



--	--	--	--	--



--	--	--	--	--

What time of the day is your favorite? Why? \_\_\_\_\_

MATH 3.MD.A.1

My mom attends her early morning workout class.

My sister's class gets dismissed for lunch.

My alarm goes off to get up for school.

My teacher opens the classroom door to let her students in to begin the school day.

I brush my teeth and get ready for bed.

I help wash the dishes after dinner.

My dad has a mid-morning dentist appointment.

My mom has coffee with a friend after lunch.

My class starts getting ready for dismissal.

My sister has soccer practice before dinner.

## ALL ABOUT ALLOWANCE Add & Subtract Within 1000

Amber and her cousins were discussing their allowance at a family reunion. Figure out whether you need to use addition or subtraction and then write and solve each equation. Next, list each family member from the highest answer to the lowest answer in the boxes at the bottom of the page.



This month, I spent the whole month mowing my uncle's huge farm and earned \$372. Last month, I helped detail over 20 cars and earned \$554. Over the last two months, I have earned \_\_\_\_\_.

+ -



In April, I sold my handmade wood chairs and made \$289. In May, I made \$364 selling handmade tables. All together I made a total of \_\_\_\_\_.

+ -



My brother made \$679 painting my uncle's house. I made \$311 less than him when I helped for a couple days. How much did I make? \_\_\_\_\_

+ -



In July I made \$967 babysitting a bunch of different kids. My friend made \$450 babysitting in July. How much more did I make than my friend? \_\_\_\_\_.

+ -



My sister worked all summer lifeguarding at the pool. She earned \$235 more than me last month. She earned \$635. How much did I make? \_\_\_\_\_

+ -



Last summer, I earned \$322 helping coach soccer. This summer I earned \$454. Over the last two summers, I have earned \_\_\_\_\_.

+ -

LIST THE \$\$ ANSWERS FROM EACH STORY PROBLEM BELOW FROM SMALLEST AMOUNT TO THE BIGGEST AMOUNT.

--	--	--	--	--

MATH 3.NBT.A.2

©2015 The Kinder Life

# Writing

# Reading Response

A **DAY** in the life of my **FAMILY**.

Using the lines to the left, write about what a typical day looks like in your family. Draw pictures of four things/activities you wrote about.

Name: \_\_\_\_\_

Early Morning

Mid-Morning

Afternoon

Evening

My favorite PART OF THE DAY:

WRITING W.2.2

MY NAME:

\_\_\_\_\_

MY PARTNER:

\_\_\_\_\_

This book was:  Fiction  Nonfiction

My favorite Part

My Partner's favorite Part

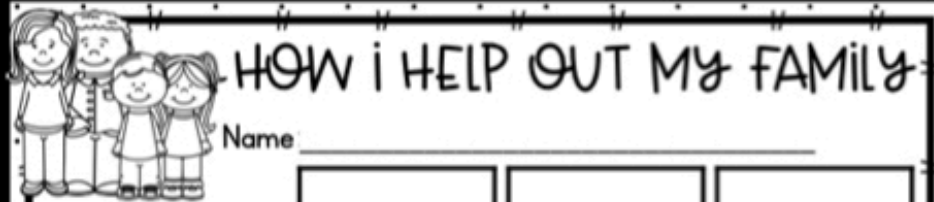


READING RESPONSE RL.2.1

© 2019 The KinderLife

# Social Studies

# Science



## HOW I HELP OUT MY FAMILY

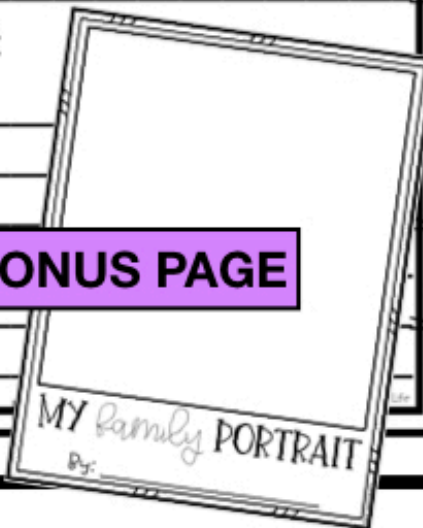
Name \_\_\_\_\_

I help my FAMILY by... *e*


It is important for my family to work as a team because...

MY family IS GOOD AT:

**BONUS PAGE**



## Our GROCERY Store List

Think of an item you might see on your family's grocery list for each of the listed properties.

<input type="checkbox"/> hot	<u>temperature</u>	HOW MUCH MIGHT IT COST? <input type="text"/>
<input type="checkbox"/> cold		HOW MUCH MIGHT IT COST? <input type="text"/>
<input type="checkbox"/> heavy	<u>weight</u>	HOW MUCH MIGHT IT COST? <input type="text"/>
<input type="checkbox"/> light		HOW MUCH MIGHT IT COST? <input type="text"/>
<input type="checkbox"/> long	<u>length</u>	HOW MUCH MIGHT IT COST? <input type="text"/>
<input type="checkbox"/> short		HOW MUCH MIGHT IT COST? <input type="text"/>
<input type="checkbox"/> bumpy	<u>texture</u>	HOW MUCH MIGHT IT COST? <input type="text"/>
<input type="checkbox"/> smooth		HOW MUCH MIGHT IT COST? <input type="text"/>
<input type="checkbox"/> dark	<u>color</u>	HOW MUCH MIGHT IT COST? <input type="text"/>
<input type="checkbox"/> light		HOW MUCH MIGHT IT COST? <input type="text"/>

*g*  
bonus items!

smell/taste

sweet


HOW MUCH MIGHT IT COST?

spicy

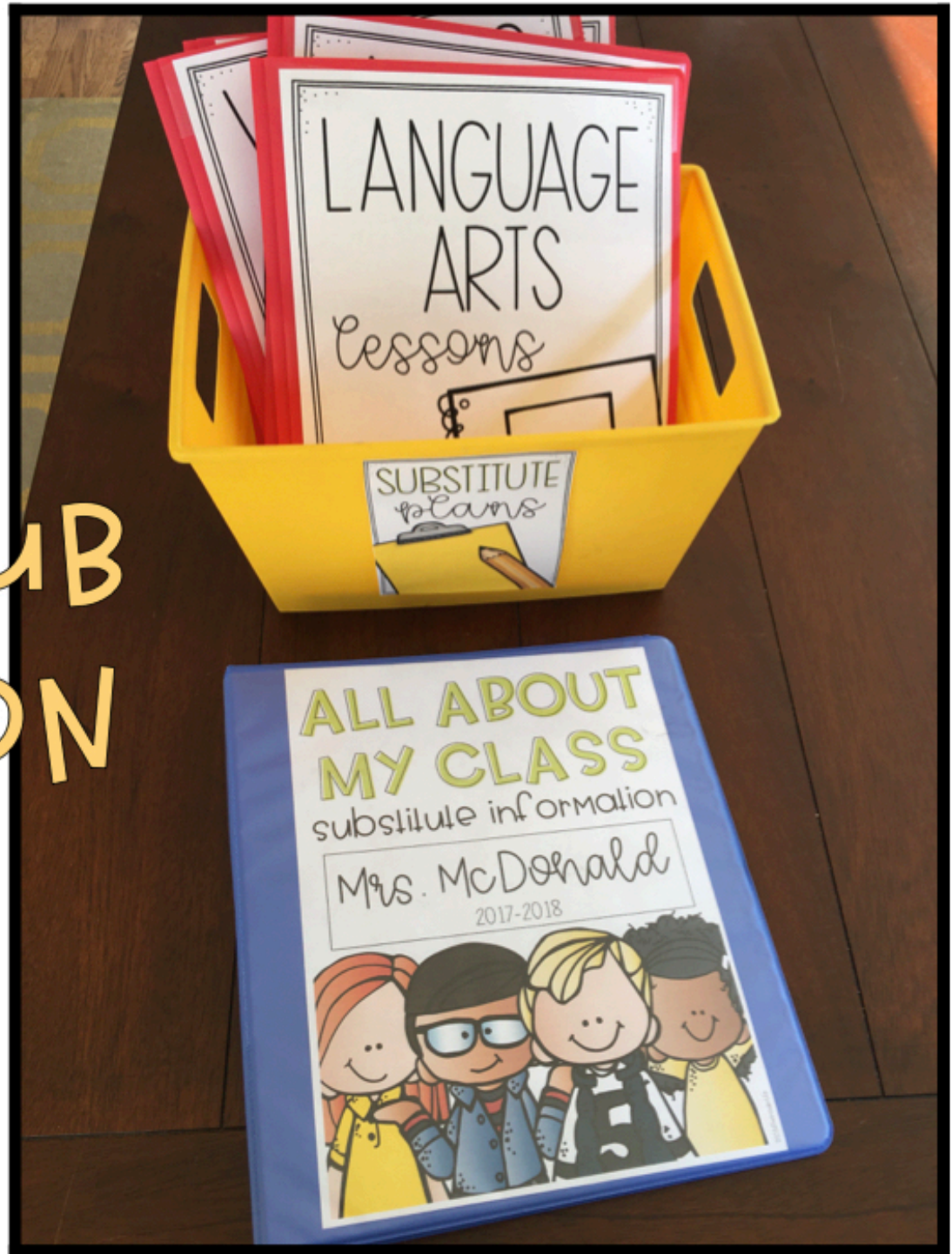
HOW MUCH MIGHT IT COST?



Name: \_\_\_\_\_



PLUS!!  
EDITABLE SUB  
INFORMATION  
BINDER



# BONUS: TASK CARD GAME INCLUDED

**SOLVE MY STORY**  
-add & subtract within 1000-

Name: \_\_\_\_\_

Read the story problem on each task card and determine whether you need to use addition or subtraction to solve the story problem. Color the operation you need to use in the task card's matching lettered box.

A	B	C
addition		
subtraction		

**SOLVE MY STORY**  
-add & subtract within 1000-

Name: \_\_\_\_\_

Read the story problem on each task card.

A	B
D	e
H	

**SOLVE MY STORY**  
-add & subtract within 1000-

Name: \_\_\_\_\_

Read the story problem on each task card and solve it by WRITING the EQUATION and coloring the matching lettered box.

A	B	C
<input type="radio"/>	<input type="radio"/>	<input type="radio"/>
<input type="text"/>	<input type="text"/>	<input type="text"/>
D	e	
<input type="radio"/>	<input type="radio"/>	
<input type="text"/>	<input type="text"/>	
G	H	I
<input type="radio"/>	<input type="radio"/>	<input type="radio"/>
<input type="text"/>	<input type="text"/>	<input type="text"/>
J	K	L
<input type="radio"/>	<input type="radio"/>	<input type="radio"/>
<input type="text"/>	<input type="text"/>	<input type="text"/>

**A**

Avery has a rock collection. She collected 476 rocks last summer. She collected 355 rocks this summer. How many rocks has she collected in all?

**B**

Jet likes to swim laps. On Monday, he swam 198 laps. On Tuesday, he swam 173 more laps than he did on Monday. How many laps did he swim on Tuesday?

**SOLVE MY STORY**  
-add & subtract within 1000-

Name: \_\_\_\_\_

Read the story problem on each task card and solve it. Find the answer on this page and write the letter of the matching task card in the oval below the answer.

SHOW YOUR WORK

<b>70</b>	<b>\$43</b>	<b>903</b>
TASK CARD <input type="radio"/>	TASK CARD <input type="radio"/>	TASK CARD <input type="radio"/>
<b>\$912</b>	<b>475</b>	<b>831</b>
TASK CARD <input type="radio"/>	TASK CARD <input type="radio"/>	TASK CARD <input type="radio"/>
<b>71</b>	<b>338</b>	<b>182</b>
<input type="radio"/>	TASK CARD <input type="radio"/>	TASK CARD <input type="radio"/>
<b>115</b>	<b>\$392</b>	<b>280</b>
TASK CARD <input type="radio"/>	TASK CARD <input type="radio"/>	TASK CARD <input type="radio"/>