

MORNING WORK







PART B

- Identify beginning sounds, ending sounds
 - Identify vowel sounds (short and long)
 - Fill in number line up to 20
 - Read, Write, and Draw (CVC words and other word patterns)
 - Tell Time to the Hour and Half-Hour
 - Fill in 100 Charts (numbers are partially missing)
 - Complete addition problems
 - Solve math story problems (and identify the accompanying equation)
 - Identify their birthday month, planet, country, and state
 - Identify days of the week as "today" "tomorrow" "yesterday"
 - Spell CVC words
 - Read CVC sentences and create pictures to match the words
- AND MORE!!







BEGINNING SOUNDS

VOWELS

Beginning Sounds ↓

Missing Vowel Sounds ↓

					
c_r	d_g	l_d	f_x	d_	





Fill in the Number Line

1 3 6

Solve the Story
Max had 1 book. He found 1 more book. How many books does he have now?

My equation: $\square + \square = \square$

Ending Sounds ↓

Fill in the Number Line

8 10







Fill in the Number Line

6 8 12

Solve the Story
Ben had 7 cups. He broke 4. How many cups were left?

My equation: $\square - \square = \square$

Missing Vowel Sounds ↓



					
I_be	s_me	J_ne	w_ke	m_ne	m_te

Fill in the Number Line

13 15 16

Find & Color

the	and	the	the	the	see	the	see	and	the	the
-----	-----	-----	-----	-----	-----	-----	-----	-----	-----	-----



Read  **Write** 

cup _____

man _____

Find & Color

like	my	the	my	the	see	we	my	and	like	the	my
------	----	-----	----	-----	-----	----	----	-----	------	-----	----



Read  **Write** 

cut _____

mat _____

Find & Color

me	wi	is	m	me	sa	to	n	me	a	see	r	me	r	see	li	with	r	me	c	me	like
----	----	----	---	----	----	----	---	----	---	-----	---	----	---	-----	----	------	---	----	---	----	------




Read  **Write** 

mud _____

log _____


Solve the Story
Sid found 9 bugs. Then, he found 1 more. How many bugs does he have now?

My equation: $\square + \square = \square$

Read  **Write**  **Draw** 

hut _____

nut _____

Find & Color  **who**

who	who	that
come	what	who
that	who	the
who	who	find
find	who	the
who	come	see
come	that	who
see	who	and
and	that	who
who	what	who
the	who	come
who	the	that



STORY PROBLEMS

NUMBER LINES

CVC WORDS

Addition

Spell

	_____		_____
	_____		_____
	_____		_____





It!



Today is _____.

Tomorrow will be _____.

Yesterday was _____.


How much money is in my purse?  →

Read  Write  Draw 

hike	_____	_____
bike	_____	_____
kite	_____	_____

Missing Numbers


100 Chart 






1		3	4	5	6	7	8	9	
11	12	13	14	15	16	17		19	20
21	22	23	24	25	26	27	28	29	30
31	32		34	35		37	38	39	40
41	42	43	44	45	46	47	48	49	50
51		53	54	55	56	57	58	59	60
61	62	63		65	66	67	68	69	
71	72	73	74	75	76	77	78	79	80
81	82		84	85		87	88	89	90
91	92	93	94	95	96	97		99	100




Addition Fluency

1+5= 5+3=
 4+3= 2+1=
 5+2= 3+3=
 3+4= 8+1=
 5+5= 4+0=

I live in the state of _____.

How much money is in my purse?  →

Read  Write  Draw 

tree	_____	_____
bee	_____	_____
feet	_____	_____

MONEY

100S CHART


SIGHT WORD SENTENCES

Missing Numbers


100 Chart


1	2	3	4			7	8	9	10	
11		13	14			16		18	20	
	22	23	24			26	27	28	29	30
31	32		34	35		36	37		39	
41		43	44			46	47	48	49	50
51	52	53	54	55	56	57		59	60	
	62		64	65	66			68	69	70
71	72	73		75	76	77	78	79	80	
81	82	83	84	85		87		89	90	
91	92	93		95	96	97	98		100	


Telling Time



My birthday is in the month of _____

How much money is in my purse?  →



Read & Draw 

The cat had a red hat.


©2013 The Literacy Life

Missing Numbers


100 Chart


1										
										50
		53		55		57			59	60
61		63	64		66				69	
	72				76		78	79		
81		83		85		87				
		93		95	96		98	99	100	


Telling Time



My country: _____

How much money is in my purse?  →



Read & Draw 

My cat had a pan and I had a pot.

©2013 The Literacy Life

telling time