


WHAT IS INCLUDED?

This pack includes the following activities:







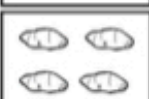













- 5 Count and Color pages numbers 1-10 & 11-20
- 10 Count and Write pages for numbers 1-10
- 10 Count and Write pages for numbers 1-20
- 5 Count and Paste pages
- An assessment that tests all numbers (1-20)
- BOY, MOY, and EOY Data Sheets for Counting and Writing Numbers to 20
- Answer Keys




















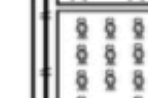

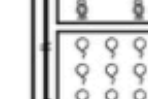
Counting to 10 & 20

Count and Color Count each group of items and color the number showing the total amount on the right.





















a

 4	 1
 5	 2
 10	 9
 9	 8
 6	 2
 5	 1
 3	 7
 4	 6
 3	 9
 2	 8









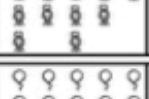


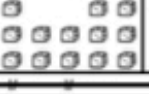


b

 7	 4
 6	 5
 8	 5
 7	 6
 3	 6
 2	 7
 9	 2
 8	 2
 10	 2
 9	 2












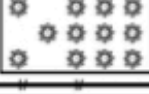


c

 4	 10
 3	 9
 6	 4
 5	 3
 7	 1
 8	 2
 10	 6
 10	 6
 10	 6
 10	 6

d

 11	 15
 12	 14
 16	 12
 15	 13
 16	 20
 17	 19
 15	 14
16	13
20	19
19	18

e

 12	 18
 13	 17
 11	 14
 12	 13
 16	 18
 17	 17
 20	 12
19	13
20	16
19	15

Counting to 10

1	2	3	4	5																																																		
<p>Count and Write</p> <p>Name: _____</p> <p>Count each group of items and write the total amount on the right.</p> <table border="1"><tr><td>↑ ↑</td><td>↑ ↑</td></tr><tr><td>○ ○ ○</td><td>○ ○ ○ ○ ○</td></tr><tr><td>○ ○</td><td>○ ○ ○ ○</td></tr><tr><td>♪ ♪</td><td>♪ ♪ ♪</td></tr><tr><td>⚙ ⚙ ⚙</td><td>☾ ☾ ☾</td></tr></table>	↑ ↑	↑ ↑	○ ○ ○	○ ○ ○ ○ ○	○ ○	○ ○ ○ ○	♪ ♪	♪ ♪ ♪	⚙ ⚙ ⚙	☾ ☾ ☾	<p>Count and Write</p> <p>Name: _____</p> <p>Count each group of items and write the total amount on the right.</p> <table border="1"><tr><td>□ □ □</td><td>□ □</td></tr><tr><td>□ □ □ □</td><td>☼ ☼ ☼ ☼</td></tr><tr><td>○ ○ ○</td><td>○ ○ ○ ○</td></tr><tr><td>☼ ☼ ☼</td><td>☼ ☼ ☼ ☼</td></tr><tr><td>● ● ●</td><td>☼ ☼</td></tr></table>	□ □ □	□ □	□ □ □ □	☼ ☼ ☼ ☼	○ ○ ○	○ ○ ○ ○	☼ ☼ ☼	☼ ☼ ☼ ☼	● ● ●	☼ ☼	<p>Count and Write</p> <p>Name: _____</p> <p>Count each group of items and write the total amount on the right.</p> <table border="1"><tr><td>☼ ☼ ☼</td><td>☼</td></tr><tr><td>□ □ □</td><td>⚙ ⚙ ⚙ ⚙</td></tr><tr><td>□ □ □</td><td>☼ ☼ ☼ ☼</td></tr><tr><td>☼ ☼ ☼ ☼</td><td>☼ ☼ ☼</td></tr><tr><td>☼ ☼ ☼ ☼</td><td>☼ ☼ ☼</td></tr></table>	☼ ☼ ☼	☼	□ □ □	⚙ ⚙ ⚙ ⚙	□ □ □	☼ ☼ ☼ ☼	☼ ☼ ☼ ☼	☼ ☼ ☼	☼ ☼ ☼ ☼	☼ ☼ ☼	<p>Count and Write</p> <p>Name: _____</p> <p>Count each group of items and write the total amount on the right.</p> <table border="1"><tr><td>□ □ □</td><td>☼ ☼ ☼ ☼</td></tr><tr><td>↑ ↑ ↑</td><td>☼ ☼ ☼ ☼</td></tr><tr><td>↑ ↑ ↑</td><td>☼ ☼ ☼</td></tr><tr><td>↑ ↑ ↑</td><td>☼ ☼ ☼</td></tr><tr><td>☼ ☼</td><td>↑ ↑ ↑</td></tr></table>	□ □ □	☼ ☼ ☼ ☼	↑ ↑ ↑	☼ ☼ ☼ ☼	↑ ↑ ↑	☼ ☼ ☼	↑ ↑ ↑	☼ ☼ ☼	☼ ☼	↑ ↑ ↑	<p>Count and Write</p> <p>Name: _____</p> <p>Count each group of items and write the total amount on the right.</p> <table border="1"><tr><td>☼ ☼</td><td>☼ ☼ ☼ ☼</td></tr><tr><td>☆ ☆</td><td>☼ ☼ ☼</td></tr><tr><td>☆ ☆</td><td>☼ ☼</td></tr><tr><td>☆ ☆</td><td>☼ ☼ ☼</td></tr><tr><td>☼ ☼ ☼</td><td>☼ ☼ ☼</td></tr></table>	☼ ☼	☼ ☼ ☼ ☼	☆ ☆	☼ ☼ ☼	☆ ☆	☼ ☼	☆ ☆	☼ ☼ ☼	☼ ☼ ☼	☼ ☼ ☼
↑ ↑	↑ ↑																																																					
○ ○ ○	○ ○ ○ ○ ○																																																					
○ ○	○ ○ ○ ○																																																					
♪ ♪	♪ ♪ ♪																																																					
⚙ ⚙ ⚙	☾ ☾ ☾																																																					
□ □ □	□ □																																																					
□ □ □ □	☼ ☼ ☼ ☼																																																					
○ ○ ○	○ ○ ○ ○																																																					
☼ ☼ ☼	☼ ☼ ☼ ☼																																																					
● ● ●	☼ ☼																																																					
☼ ☼ ☼	☼																																																					
□ □ □	⚙ ⚙ ⚙ ⚙																																																					
□ □ □	☼ ☼ ☼ ☼																																																					
☼ ☼ ☼ ☼	☼ ☼ ☼																																																					
☼ ☼ ☼ ☼	☼ ☼ ☼																																																					
□ □ □	☼ ☼ ☼ ☼																																																					
↑ ↑ ↑	☼ ☼ ☼ ☼																																																					
↑ ↑ ↑	☼ ☼ ☼																																																					
↑ ↑ ↑	☼ ☼ ☼																																																					
☼ ☼	↑ ↑ ↑																																																					
☼ ☼	☼ ☼ ☼ ☼																																																					
☆ ☆	☼ ☼ ☼																																																					
☆ ☆	☼ ☼																																																					
☆ ☆	☼ ☼ ☼																																																					
☼ ☼ ☼	☼ ☼ ☼																																																					
6	7	8	9	10																																																		
<p>Count and Write</p> <p>Name: _____</p> <p>Count each group of items and write the total amount on the right.</p> <table border="1"><tr><td>☼ ☼ ☼</td><td>☼ ☼ ☼ ☼</td></tr><tr><td>☼ ☼ ☼</td><td>☼ ☼ ☼</td></tr><tr><td>☼ ☼ ☼</td><td>☼ ☼ ☼ ☼</td></tr><tr><td>☼ ☼</td><td>☼ ☼ ☼ ☼</td></tr><tr><td>☼ ☼</td><td>☼ ☼</td></tr></table>	☼ ☼ ☼	☼ ☼ ☼ ☼	☼ ☼ ☼	☼ ☼ ☼	☼ ☼ ☼	☼ ☼ ☼ ☼	☼ ☼	☼ ☼ ☼ ☼	☼ ☼	☼ ☼	<p>Count and Write</p> <p>Name: _____</p> <p>Count each group of items and write the total amount on the right.</p> <table border="1"><tr><td>☼ ☼ ☼</td><td>☼ ☼ ☼ ☼</td></tr><tr><td>☼ ☼ ☼</td><td>☼ ☼ ☼ ☼</td></tr><tr><td>☼ ☼ ☼</td><td>☼ ☼ ☼ ☼</td></tr><tr><td>☼ ☼ ☼</td><td>☼ ☼ ☼ ☼</td></tr><tr><td>☼ ☼ ☼</td><td>☼ ☼ ☼ ☼</td></tr></table>	☼ ☼ ☼	☼ ☼ ☼ ☼	☼ ☼ ☼	☼ ☼ ☼ ☼	☼ ☼ ☼	☼ ☼ ☼ ☼	☼ ☼ ☼	☼ ☼ ☼ ☼	☼ ☼ ☼	☼ ☼ ☼ ☼	<p>Count and Write</p> <p>Name: _____</p> <p>Count each group of items and write the total amount on the right.</p> <table border="1"><tr><td>☼ ☼</td><td>☼ ☼ ☼ ☼</td></tr><tr><td>☼ ☼ ☼</td><td>☼ ☼ ☼</td></tr><tr><td>☼ ☼ ☼</td><td>☼ ☼ ☼ ☼</td></tr><tr><td>☼ ☼ ☼</td><td>☼ ☼ ☼ ☼</td></tr><tr><td>☼ ☼ ☼</td><td>☼ ☼ ☼ ☼</td></tr></table>	☼ ☼	☼ ☼ ☼ ☼	☼ ☼ ☼	☼ ☼ ☼	☼ ☼ ☼	☼ ☼ ☼ ☼	☼ ☼ ☼	☼ ☼ ☼ ☼	☼ ☼ ☼	☼ ☼ ☼ ☼	<p>Count and Write</p> <p>Name: _____</p> <p>Count each group of items and write the total amount on the right.</p> <table border="1"><tr><td>☼ ☼</td><td>☼ ☼ ☼ ☼</td></tr><tr><td>☼ ☼ ☼</td><td>☼ ☼ ☼</td></tr><tr><td>☼ ☼ ☼</td><td>☼ ☼ ☼ ☼</td></tr><tr><td>☼ ☼ ☼</td><td>☼ ☼ ☼ ☼</td></tr><tr><td>☼ ☼ ☼</td><td>☼ ☼ ☼ ☼</td></tr></table>	☼ ☼	☼ ☼ ☼ ☼	☼ ☼ ☼	☼ ☼ ☼	☼ ☼ ☼	☼ ☼ ☼ ☼	☼ ☼ ☼	☼ ☼ ☼ ☼	☼ ☼ ☼	☼ ☼ ☼ ☼	<p>Count and Write</p> <p>Name: _____</p> <p>Count each group of items and write the total amount on the right.</p> <table border="1"><tr><td>☼ ☼</td><td>☼ ☼ ☼ ☼</td></tr><tr><td>☼ ☼ ☼</td><td>☼ ☼ ☼</td></tr><tr><td>☼ ☼ ☼</td><td>☼ ☼ ☼ ☼</td></tr><tr><td>☼ ☼ ☼</td><td>☼ ☼ ☼ ☼</td></tr><tr><td>☼ ☼ ☼</td><td>☼ ☼ ☼ ☼</td></tr></table>	☼ ☼	☼ ☼ ☼ ☼	☼ ☼ ☼	☼ ☼ ☼	☼ ☼ ☼	☼ ☼ ☼ ☼	☼ ☼ ☼	☼ ☼ ☼ ☼	☼ ☼ ☼	☼ ☼ ☼ ☼
☼ ☼ ☼	☼ ☼ ☼ ☼																																																					
☼ ☼ ☼	☼ ☼ ☼																																																					
☼ ☼ ☼	☼ ☼ ☼ ☼																																																					
☼ ☼	☼ ☼ ☼ ☼																																																					
☼ ☼	☼ ☼																																																					
☼ ☼ ☼	☼ ☼ ☼ ☼																																																					
☼ ☼ ☼	☼ ☼ ☼ ☼																																																					
☼ ☼ ☼	☼ ☼ ☼ ☼																																																					
☼ ☼ ☼	☼ ☼ ☼ ☼																																																					
☼ ☼ ☼	☼ ☼ ☼ ☼																																																					
☼ ☼	☼ ☼ ☼ ☼																																																					
☼ ☼ ☼	☼ ☼ ☼																																																					
☼ ☼ ☼	☼ ☼ ☼ ☼																																																					
☼ ☼ ☼	☼ ☼ ☼ ☼																																																					
☼ ☼ ☼	☼ ☼ ☼ ☼																																																					
☼ ☼	☼ ☼ ☼ ☼																																																					
☼ ☼ ☼	☼ ☼ ☼																																																					
☼ ☼ ☼	☼ ☼ ☼ ☼																																																					
☼ ☼ ☼	☼ ☼ ☼ ☼																																																					
☼ ☼ ☼	☼ ☼ ☼ ☼																																																					
☼ ☼	☼ ☼ ☼ ☼																																																					
☼ ☼ ☼	☼ ☼ ☼																																																					
☼ ☼ ☼	☼ ☼ ☼ ☼																																																					
☼ ☼ ☼	☼ ☼ ☼ ☼																																																					
☼ ☼ ☼	☼ ☼ ☼ ☼																																																					

Counting to 20

Count and Write 11 Count each group of items and write the total amount on the right.

Name: _____			

Count and Write 12 Count each group of items and write the total amount on the right.

Name: _____			

Count and Write 13 Count each group of items and write the total amount on the right.

Name: _____			

Count and Write 14 Count each group of items and write the total amount on the right.

Name: _____			

Count and Write 15 Count each group of items and write the total amount on the right.

Name: _____			

Count and Write 16 Count each group of items and write the total amount on the right.

Name: _____			

Count and Write 17 Count each group of items and write the total amount on the right.

Name: _____			

Count and Write 18 Count each group of items and write the total amount on the right.

Name: _____			

Count and Write 19 Count each group of items and write the total amount on the right.

Name: _____			

Count and Write 20 Count each group of items and write the total amount on the right.

Name: _____			

count & paste

A
Count and PASTE Name: _____



Count and PASTE Name: _____

8 4
5 2

D
Count and PASTE Name: _____



Count and PASTE Name: _____

E
Count and PASTE Name: _____

C
Count and PASTE Name: _____

3 1 4 7
12 8 10 14

20 18 15 5
8 6 16 11











assessment

Count and Write

Count each group of items and write the total amount on the right.

test A

Name: _____


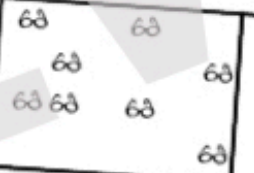




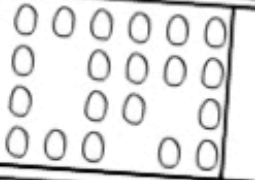



			
			
			
			
			

Count and Write

Count each group of items and write the total amount on the right.

test B

Name: _____

data sheets

